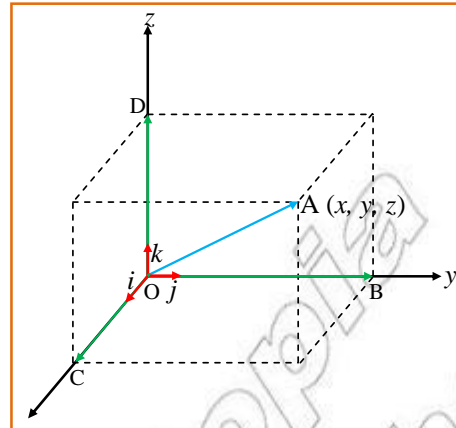


Unit 6



THREE DIMENSIONAL GEOMETRY AND VECTORS IN SPACE

Unit Outcomes:

After completing this unit, you should be able to:

- know methods and procedures for setting up coordinate systems in space.
- know basic facts about coordinates and their use in determining geometric concepts in space.
- apply facts and principles about coordinates in space to solve related problems.
- know specific facts about vectors in space.

Main Contents

6.1 COORDINATE AXES AND COORDINATE PLANES IN SPACE

6.2 COORDINATES OF A POINT IN SPACE

6.3 DISTANCE BETWEEN TWO POINTS IN SPACE

6.4 MIDPOINT OF A LINE SEGMENT IN SPACE

6.5 EQUATION OF SPHERE

6.6 VECTORS IN SPACE

Key terms

Summary

Review Exercises

INTRODUCTION

IN THIS UNIT, YOU WILL BE INTRODUCED TO THE COORDINATE SYSTEM IN SPACE WHICH IS AN EXTENSION OF THE COORDINATE SYSTEM ON THE PLANE THAT YOU ARE ALREADY FAMILIAR WITH. THE UNIT BEGINS WITH A SHORT REVISION OF THE COORDINATE PLANE AND THEN INTRODUCES THE THREE-DIMENSIONAL COORDINATE SYSTEM. YOU WILL LEARN HOW THE THREE-DIMENSIONAL COORDINATES ARE USED TO FIND DISTANCE BETWEEN TWO POINTS, THE MIDPOINT OF A LINE SEGMENT IN SPACE AND HOW THEY ARE USED TO DERIVE THE EQUATION OF A SPHERE. FINALLY, YOU WILL SEE HOW THREE-DIMENSIONAL COORDINATES CAN BE APPLIED TO THE STUDY OF VECTORS IN SPACE.

EACH TOPIC IN THIS UNIT IS PRECEDED BY A FEW ACTIVITIES AND YOU ARE EXPECTED TO ATTEMPT AN ACTIVITY. ATTEMPTING ALL THE EXERCISES AT THE END OF EACH SECTION WILL ALSO HELP YOU TO SOLVE PROBLEMS WITH CONFIDENCE.



OPENING PROBLEM

TWO AIRPLANES TOOK OFF FROM THE SAME AIRPORT AT THE SAME TIME. ONE WAS HEADING NORTH WITH A GROUND SPEED OF 1600 KM/H. THE SECOND HEADING EAST WITH A GROUND SPEED OF 700 KM/H. IF THE FLIGHT LEVEL OF THE ONE HEADING NORTH IS 10 KM AND THAT OF HEADING EAST IS 12 KM, WHAT IS THE DIRECT DISTANCE BETWEEN THE TWO AIRPLANES EXACTLY ONE HOUR AFTER TAKEOFF?

6.1 COORDINATE AXES AND COORDINATE PLANES IN SPACE

RECALL THAT YOU SET UP A RECTANGULAR COORDINATE SYSTEM ON A PLANE BY USING TWO LINES THAT ARE PERPENDICULAR TO EACH OTHER AT A POINT O. ONE OF THESE LINES, CALLED THE HORIZONTAL AXIS IS USUALLY TAKEN TO BE THE X-AXIS AND THE SECOND LINE IS TAKEN TO BE THE Y-AXIS. THEN USING THESE TWO AXES YOU ASSOCIATE EACH POINT P OF THE PLANE WITH A UNIQUE ORDERED PAIR OF REAL NUMBERS AS (x, y) .

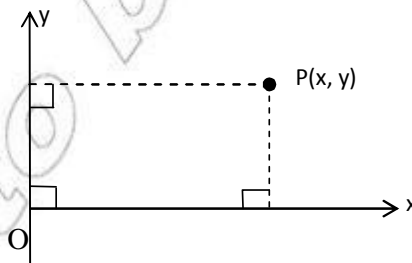


Figure 6.1

ACTIVITY 6.1



- 1 PLOT EACH OF THE FOLLOWING POINTS ON A COORDINATE PLANE.
- | | | |
|----------------------|--|--|
| A $P(2, 3)$ | B $Q(-3, 3)$ | C $R(0, -4)$ |
| D $S(-2, -3)$ | E $T\left(-\frac{3}{4}, \frac{1}{2}\right)$ | F $U\left(\frac{3}{2}, -\frac{5}{2}\right)$ |
- 2 BY NAMING THE VERTICAL AXIS AND HORIZONTAL AXIS, THE FOLLOWING POINTS.
- | | | |
|--------------------|---------------------|----------------------|
| A $A(2, 4)$ | B $B(-2, 3)$ | C $C(-3, -4)$ |
|--------------------|---------------------|----------------------|

THIS ASSOCIATION OF THE POINTS OF THE PLANE AND ORDERED PAIRS OF REAL NUMBERS IS ONE CORRESPONDENCE.

THE RECTANGULAR COORDINATE SYSTEM IS EXTENDED TO THREE DIMENSIONAL SPACES. CONSIDER A FIXED POINT O IN SPACE AND THREE LINES THAT ARE MUTUALLY PERPENDICULAR TO EACH OTHER AND PASS THROUGH POINT O. THE POINT O IS CALLED THE ORIGIN; THE THREE LINES ARE NOW CALLED THE x-AXIS AND THE y-AXIS AND THE z-AXIS. IT IS COMMON TO HAVE THE x-AXIS AND THE y-AXIS ON A HORIZONTAL PLANE AND THE z-AXIS VERTICAL OR PERPENDICULAR TO THE PLANE CONTAINING THE x-AXIS AND THE y-AXIS AS SHOWN IN FIGURE 6.2 BELOW. THE DIRECTIONS OF THE AXES ARE BASED ON THE RIGHT HAND RULE SHOWN IN FIGURE 6.2 BELOW.

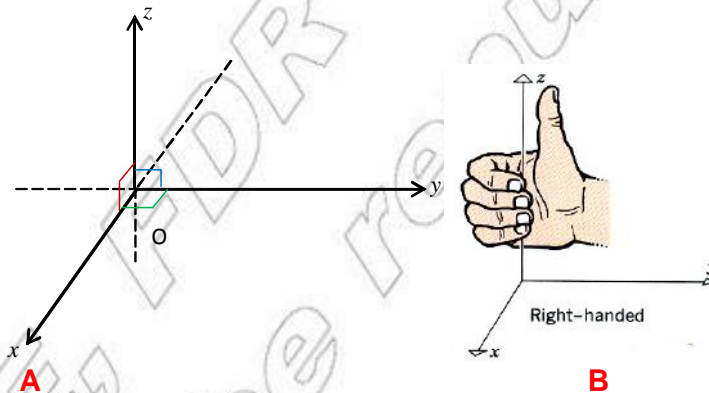


Figure 6.2

THE PLANE DETERMINED BY THE x-AXIS AND THE y-AXIS IS CALLED THE xy-PLANE, THE PLANE DETERMINED BY THE x-AXIS AND THE z-AXIS IS CALLED THE xz-PLANE AND THE PLANE DETERMINED BY THE y-AXIS AND THE z-AXIS IS CALLED THE yz-PLANE. THESE THREE COORDINATE PLANES, WHICH INTERSECT AT THE ORIGIN, MAY BE VISUALIZED AS THE FLOOR OF A ROOM AND TWO ADJACENT WALLS OF THAT ROOM. THE FLOOR REPRESENTS THE xy-PLANE, THE TWO WALLS CORRESPONDING TO THE xz-PLANE AND THE yz-PLANE THAT INTERSECT AT THE ORIGIN AND THE CORNER OF THE ROOM CORRESPONDING TO THE ORIGIN.

COMMONLY, THE POSITIVE DIRECTION OF THE z-AXIS IS TAKEN AS BEING OUT OF THE PAGE TOWARDS THE READER; THE POSITIVE DIRECTION OF THE x-AXIS IS TO THE RIGHT AND THE POSITIVE DIRECTION OF THE y-AXIS IS UPWARDS. (OPPOSITE DIRECTIONS TO THESE ARE NEGATIVE).

NOTICE THAT THE **coordinate planes** PARTITION THE SPACE INTO EIGHT PARTS KNOWN AS OCTANT 1 IS THE PART OF THE SPACE WHOSE BOUNDING EDGES ARE THE THREE POSITIVE AXES, THE POSITIVE **x**-AXIS, THE POSITIVE **y**-AXIS AND THE POSITIVE **z**-AXIS. THEN OCTANTS 2, 3 AND 4 ARE THOSE WHICH LIE ABOVE THE **xy**-PLANE, WHERE OCTANT 5 IS JUST BELOW OCTANT 1 AND THE REST BEING IN THE COUNTER CLOCKWISE ORDER ABOUT THE **z**-AXIS.

6.2 COORDINATES OF A POINT IN SPACE

AS INDICATED AT THE BEGINNING OF THIS UNIT, A POINT P ON A PLANE IS ASSOCIATED WITH A UNIQUE ORDERED PAIR OF REAL NUMBERS. IN SPACE, TWO PERPENDICULAR LINES KNOWN AS THE **x**-AXIS AND THE **y**-AXIS. YOU ALSO REMEMBER THAT **x** REPRESENTS THE DIRECTED DISTANCE OF P FROM THE **y**-AXIS AND **y** REPRESENTS THE DIRECTED DISTANCE OF P FROM THE **x**-AXIS. FOR EXAMPLE, IF THE COORDINATES OF P ARE (3, 2), IT MEANS THAT P IS 3 UNITS TO THE RIGHT OF THE **y**-AXIS AND 2 UNITS ABOVE THE **x**-AXIS. SIMILARLY, A POINT Q IS FOUND 4 UNITS TO THE RIGHT OF THE **y**-AXIS AND 5 UNITS ABOVE THE **x**-AXIS.

ACTIVITY 6.2



PLOT EACH OF THE FOLLOWING POINTS USING THE THREE AXES IN THE FIGURE ABOVE.

- A** A(3,4,0) **B** B(0,3,4) **C** C(3,0,4)

NOW A POINT P IN SPACE IS LOCATED BY SPECIFYING ITS DIRECTED DISTANCES FROM THE COORDINATE PLANES. ITS DIRECTED DISTANCE FROM THE **xy**-PLANE MEASURED ALONG OR PARALLEL TO THE **z**-AXIS IS ITS **z**-COORDINATE. ITS DIRECTED DISTANCE FROM THE **yz**-PLANE MEASURED ALONG OR PARALLEL TO THE **x**-AXIS IS ITS **x**-COORDINATE AND ITS DIRECTED DISTANCE FROM THE **xz**-PLANE MEASURED ALONG OR PARALLEL TO THE **y**-AXIS IS ITS **y**-COORDINATE.

THE COORDINATES OF P ARE THEREFORE WRITTEN AS (x, y, z) AS SHOWN IN FIGURE 6.3 BELOW.

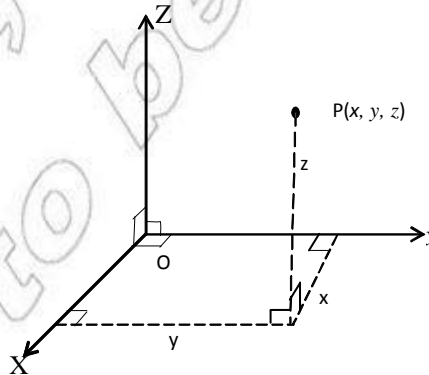


Figure 6.3

Example 1 LOCATE THE POINT A(2, 4, 3) IN SPACE USING THE REFERENCE AXES

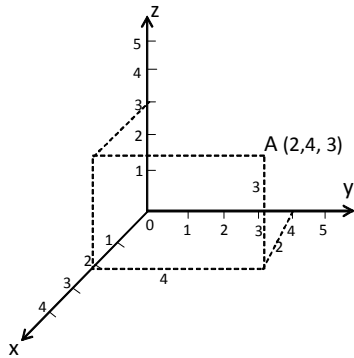


Figure 6.4 (Example 1)

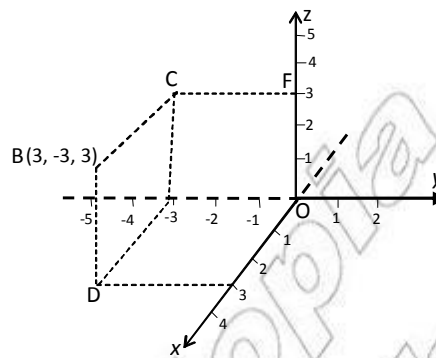


Figure 6.5 (Example 2)

Example 2 LOCATE THE POINT B(3, -3, 3) IN SPACE USING THE REFERENCE AXES

THE PROCESS OF LOCATING THE POINT B MAY BE DESCRIBED AS FOLLOWS: START FROM ORIGIN O AND MOVE 3 UNITS IN THE DIRECTION OF THE POSITIVE x-AXIS, THEN MOVE 3 UNITS IN THE DIRECTION OF THE NEGATIVE y-AXIS AND FINALLY MOVE 3 UNITS UP IN THE DIRECTION OF THE POSITIVE z-AXIS TO GET POINT B.

ON THE SAME COORDINATE SYSTEM AS ABOVE, NOTICE THAT THE COORDINATES OF POINT C ARE (0, -3, 3), THE COORDINATES OF POINT D ARE (3, 0, 0) AND THE COORDINATES OF POINT F ARE (0, 0, 3) AND THE COORDINATES OF POINT O (OR THE ORIGIN) ARE (0, 0, 0).

LOCATING A GIVEN POINT IN SPACE AS OBSERVED FROM THE DIFFERENT EXAMPLES ABOVE IS CONSIDERED AS CORRESPONDING OR MATCHING A GIVEN ORDERED TRIPLE OF REAL NUMBERS WITH SOME POINT P IN SPACE. (SEE PROBLEMS 3, 4 and 5 of EXERCISE 6.1)

USING THIS FACT, IT IS POSSIBLE TO DESCRIBE SOME GEOMETRIC FIGURES IN SPACE BY MEANS OF EQUATIONS. FOR EXAMPLE, THIS IS THE SET OF ALL POINTS IN SPACE WHOSE COORDINATES ARE ZERO. THUS WE EXPRESS IT AS FOLLOWS:

$$x\text{-AXIS} = \{(x, y, z) : x, y, z \in \mathbb{R} \text{ AND } y = z = 0\}$$

Exercise 6.1

1 LOCATE EACH OF THE FOLLOWING POINTS IN SPACE USING REFERENCE AXES. YOU MAY USE THE SAME OR DIFFERENT COORDINATE SYSTEMS IN EACH CASE.

- | | | |
|-----------------------|-----------------------|--------------------------------------|
| A P (3, 2, 3) | B Q (-2, 4, 3) | C R (3, -3, 4) |
| D T(-2, -3, 3) | E M(0, 0, -4) | F N(2.5, $-\frac{1}{2}$, -3) |
| G Q(0, -3, 0) | | |

2 GIVE THE EQUATIONS OF

- | | | |
|----------------------|-----------------------|----------------------|
| A THE y-AXIS | B THE x-AXIS | C THE y-PLANE |
| D THE z-PLANE | E THE xz-PLANE | |

- 3** GIVEN ANY POINT P IN SPACE, DRAW A COORDINATE SYSTEM
- DROP A PERPENDICULAR LINE FROM P TO THE PLANE.
 - MARK THE INTERSECTION POINT OF THE PERPENDICULAR BY Q.
 - MEASURE THE DISTANCE FROM P TO Q WITH A RULER AND MAKE A MARK ON THE z -AXIS. CALL IT c .
 - DROP PERPENDICULAR LINES TO EACH OF THE x AND y AXES FROM POINT Q AND MARK THE INTERSECTION POINTS ON THE x AND y AXES, SAY x_1 AND y_1 .
 - THE TRIPLE (x_1, y_1, c) YOU FOUND IN THE ABOVE STEPS UNIQUELY CORRESPONDS TO THE POINT. VERIFY! THIS TRIPLE (x_1, y_1, c) ARE THE COORDINATE OF P IN SPACE.
- 4** GIVEN ANY ORDERED TRIPLE (a, b, c)
- DRAW A COORDINATE SPACE AND LABEL EACH AXIS.
 - MARK ON THE x -AXIS a ON THE y -AXIS b AND ON THE z -AXIS c .
 - FROM a , DRAW A LINE PARALLEL TO THE y -AXIS AND FROM b , DRAW A LINE PARALLEL TO THE x -AXIS; FIND THE INTERSECTION OF THE TWO LINES: MARK IT AS POINT R.
 - FROM POINT R, DRAW A LINE PARALLEL TO THE z -AXIS AND FROM c , DRAW A LINE PERPENDICULAR TO THE xy -PLANE THAT INTERSECTS THE LINE FROM R. MARK THE INTERSECTION OF THESE TWO LINES BY POINT P.
 - THE POINT P IN SPACE CORRESPONDS TO THE ORDERED TRIPLE (a, b, c) . VERIFY THAT THERE IS NO OTHER POINT IN SPACE DESCRIBING THE ORDERED TRIPLE (a, b, c) . ARE THE COORDINATES OF P.
- 5** CAN YOU CONCLUDE FROM THE ABOVE PROBLEMS, THAT THERE IS A ONE-TO-ONE CORRESPONDENCE BETWEEN THE SET OF POINTS IN SPACE AND THE SET OF ORDERED TRIPLES OF REAL NUMBERS? WHY? YOU MAY NEED TO USE THE BASIC FACTS OF SOLID GEOMETRY ABOUT PARALLEL AND PERPENDICULAR LINES AND PLANES IN SPACE.

6.3 DISTANCE BETWEEN TWO POINTS IN SPACE



OPENING PROBLEM

ASSUME THAT YOUR CLASSROOM IS A RECTANGULAR BOX WHERE THE FLOOR IS 8 METRES LONG AND 6 METRES WIDE. IF THE DISTANCE FROM THE FLOOR TO THE CEILING (HEIGHT OF THE ROOM) IS 3 METRES, FIND THE DIAGONAL DISTANCE BETWEEN A CORNER OF THE ROOM ON THE FLOOR AND THE OPPOSITE CORNER ON THE CEILING.

AFTER COMPLETING THIS SECTION, YOU WILL SEE THAT SOLVING THIS PROBLEM IS A MATTER OF FINDING DISTANCE BETWEEN TWO POINTS IN SPACE USING THEIR COORDINATES.

ACTIVITY 6.3



- 1 ON THE COORDINATE PLANE, CONSIDER POINTS $P(x_1, y_1)$ AND $Q(x_2, y_2)$ TO BE ANY TWO DISTINCT POINTS. THEN FIND THE DISTANCE BETWEEN P AND Q OR THE LENGTH OF THE LINE SEGMENT PQ BY USING THE PYTHAGORAS THEOREM.

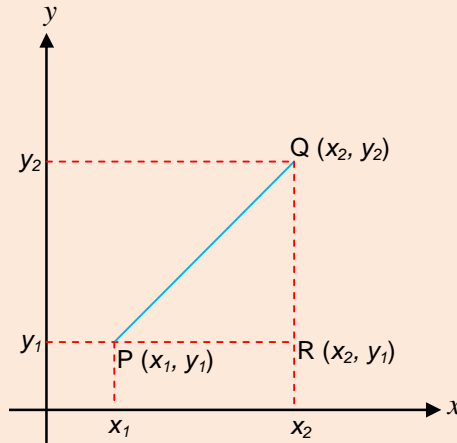


Figure 6.6

- 2 FIND THE DISTANCE BETWEEN THE FOLLOWING PAIRS OF POINTS.
- A** $A(3,4,0)$ AND $B(1,5,0)$ **B** $C(0,3,4)$ AND $D(0,1,2)$
- C** $E(4,0,5)$ AND $F(1,0,1)$

THE SAME PRINCIPLE WHICH YOU USE IN TWO DIMENSIONS CAN BE USED TO FIND THE DISTANCE BETWEEN TWO POINTS IN SPACE WHOSE COORDINATES ARE GIVEN.

FIRST, LET US CONSIDER THE DISTANCE OF A POINT $P(x, y, z)$ FROM THE ORIGIN O OF THE COORDINATE SYSTEM.

FROM THE POINT $P(x, y, z)$, LET US DROP PERPENDICULAR LINE SEGMENTS TO THE THREE PLANES AND LET US COMPLETE THE RECTANGULAR BOX, WHOSE EDGES ARE AS SHOWN IN FIGURE 6.7. LET ITS VERTICES BE NAMED O, A, B, C, D, P, Q AND R.

THEN, TO FIND THE DISTANCE FROM O TO POINT P, CONSIDER THE RIGHT ANGLED TRIANGLE OBP.

HERE NOTICE \overline{PB} IS PERPENDICULAR TO \overline{OB} AT B, AND HENCE IT IS PERPENDICULAR TO \overline{OP} AT B.

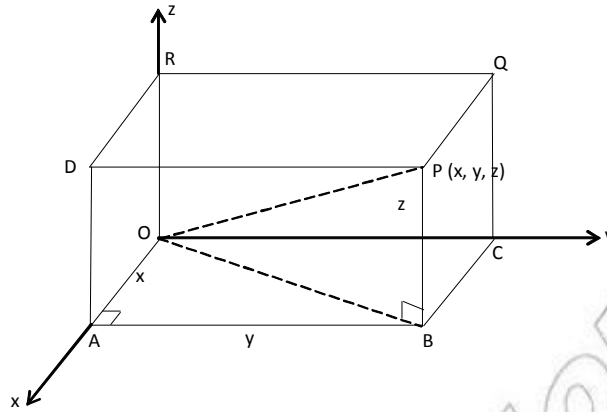


Figure 6.7

NOW \overline{OP} IS THE HYPOTENUSE OF THE RIGHT ANGLED TRIANGLE OBP , YOU KNOW BY PYTHAGORAS THEOREM THAT $(OP)^2 = (OB)^2 + (PB)^2$

ONCE AGAIN, \overline{OB} IS THE HYPOTENUSE OF THE RIGHT ANGLED TRIANGLE OAB , YOU HAVE $(OB)^2 = (OA)^2 + (AB)^2$.

THEN SUBSTITUTING BY $(OA)^2 + (AB)^2$ IN $(OP)^2 = (OB)^2 + (PB)^2$, YOU OBTAIN

$$(OP)^2 = (OA)^2 + (AB)^2 + (PB)^2 = x^2 + y^2 + z^2$$

OR $OP = \sqrt{x^2 + y^2 + z^2}$

Note:

OBSERVE THAT A DIAGONAL OF THE RECTANGULAR BOX AND AN ABSOLUTE VALUE, ARE THE LENGTHS OF ITS THREE CONCURRENT EDGES. THEREFORE, THE DISTANCE FROM THE ORIGIN TO THE POINT $P(x, y, z)$ IS THE LENGTH OF THE LINE SEGMENT \overline{OP} . NOW THE LENGTH OF THE DIAGONAL OF THE RECTANGULAR BOX WHICH IS THE SQUARE OF THE SUM OF THE SQUARES OF THE LENGTHS OF THE THREE EDGES OF THE BOX

Example 1 FIND THE DISTANCE FROM THE ORIGIN TO THE POINT $P(3, 4, 5)$.

Solution THE DISTANCE FROM THE ORIGIN TO THE POINT P IS THE LENGTH OF THE LINE SEGMENT \overline{OP} , WHICH IS

$$OP = \sqrt{x^2 + y^2 + z^2} = \sqrt{3^2 + 4^2 + 5^2} = 5\sqrt{2} \text{ UNITS}$$

Example 2 FIND THE DISTANCE FROM THE ORIGIN TO THE POINT $Q(-2, 0, 3)$

Solution $OQ = \sqrt{(-2)^2 + 0^2 + 3^2} = \sqrt{13}$ UNITS

NOW, LET $P(x_1, y_1, z_1)$ AND $Q(x_2, y_2, z_2)$ BE ANY TWO POINTS IN SPACE. TO FIND THE DISTANCE BETWEEN THESE TWO GIVEN POINTS, YOU MAY CONSIDER A RECTANGULAR BOX IN THE COORDINATE SPACE SO THAT THE GIVEN POINTS P AND Q ARE ITS OPPOSITE VERTICES AS SHOWN IN FIGURE 6.8

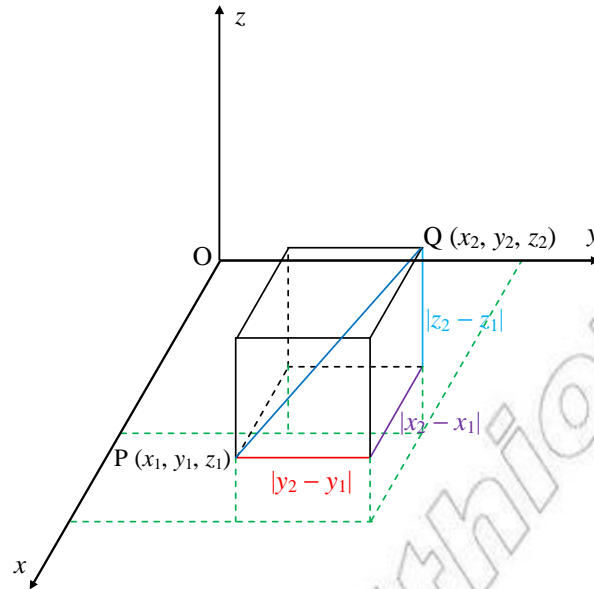


Figure 6.8

THEN WE SEE THAT THE LENGTHS OF THE THREE CONCURRENT EDGES OF THE BOX ARE $|x_2 - x_1|$, $|y_2 - y_1|$ AND $|z_2 - z_1|$.

THUS, THE DISTANCE FROM P TO Q OR THE LENGTH OF THE DIAGONAL IS GIVEN BY

$$PQ = \sqrt{(x_2 - x_1)^2 + (y_2 - y_1)^2 + (z_2 - z_1)^2}$$

Example 3 FIND THE DISTANCE BETWEEN THE POINTS $P(-1, 0, 3)$ AND $Q(-4, 0, 5)$

Solution $PQ = \sqrt{(x_2 - x_1)^2 + (y_2 - y_1)^2 + (z_2 - z_1)^2} = \sqrt{(-4 - (-1))^2 + (0 - 0)^2 + (5 - 3)^2}$
 $= \sqrt{25 + 0 + 4} = \sqrt{29}$ UNITS

Exercise 6.2

1 FIND THE DISTANCE BETWEEN THE GIVEN POINTS IN SPACE.

A $A(0, 1, 0)$ AND $B(2, 0, 3)$

B $C(2, 1, 3)$ AND $D(4, 6, 10)$

C $E(-1, -3, 6)$ AND $F(4, 0, -2)$

D $G(7, 0, 0)$ AND $H(0, -4, 2)$

E $L\left(-1, -\frac{1}{2}, -\frac{1}{4}\right)$ AND $M(-4, 0, -1)$

F $N(7, 11, 12)$ AND $P(-6, -2, 0)$

G $Q(\sqrt{2}, -\sqrt{2}, 1)$ AND $R(0, 0, -11)$

2 CAN YOU NOW SOLVE THE OPENING PROBLEM? PLEASE TRY IT.

6.4 MIDPOINT OF A LINE SEGMENT IN SPACE

ACTIVITY 6.4

ON THE COORDINATE PLANE, $P(x_1, y_1)$ AND $Q(x_2, y_2)$ ARE THE ENDPOINTS OF A LINE SEGMENT. YOU KNOW THAT ITS MIDPOINT M HAS COORDINATES

$$\left(\frac{x_1 + x_2}{2}, \frac{y_1 + y_2}{2} \right).$$

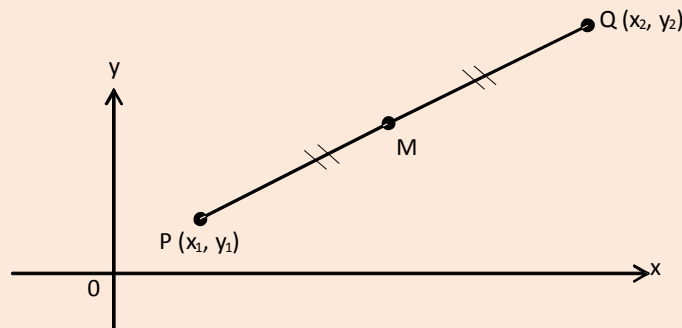


Figure 6.9

- FIND THE COORDINATES OF THE MIDPOINTS OF THE LINE SEGMENTS WITH GIVEN END POINTS ON A PLANE.

A $A(2,4)$ AND $B(0,2)$ **B** $C(-1,3)$ AND $D(3,-1)$

C $E\left(\frac{1}{4}, -\frac{3}{4}\right)$ AND $F\left(\frac{3}{4}, \frac{3}{4}\right)$
- FIND THE COORDINATES OF THE MIDPOINTS OF THE LINE SEGMENTS WITH GIVEN END POINTS IN SPACE.

A $A(2,4,0)$ AND $B(0,2,0)$ **B** $C(-1,3,0)$ AND $D(3,-1,0)$

C $E\left(\frac{1}{4}, -\frac{3}{4}, 0\right)$ AND $F\left(\frac{3}{4}, \frac{3}{4}, 0\right)$

THE COORDINATES OF THE MIDPOINT OF A LINE SEGMENT IN SPACE ARE ALSO OBTAINED IN THE SAME WAY. THAT IS, THE COORDINATES OF THE MIDPOINT ARE OBTAINED BY TAKING THE AVERAGE OF THE RESPECTIVE COORDINATES OF THE ENDPOINTS OF THE GIVEN LINE SEGMENT. THUS, IF $P(x_1, y_1, z_1)$ AND $Q(x_2, y_2, z_2)$ ARE THE END POINTS OF A LINE SEGMENT IN SPACE, THE COORDINATES OF THE

MIDPOINT M WILL BE $\left(\frac{x_1 + x_2}{2}, \frac{y_1 + y_2}{2}, \frac{z_1 + z_2}{2} \right)$ See **FIGURE 6.10**

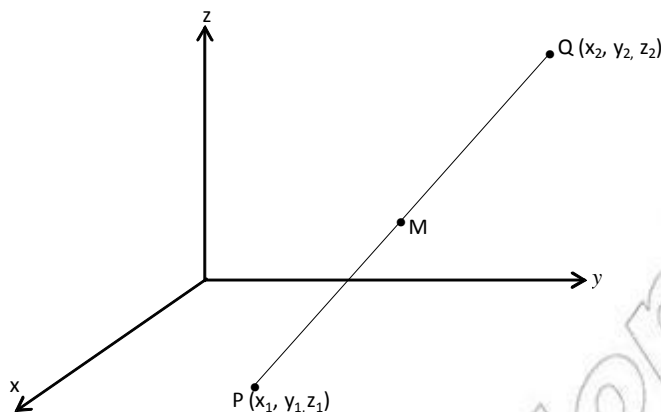


Figure 6.10

Example 1 FIND THE MIDPOINT OF THE LINE SEGMENT WITH ENDPOINTS
 $A(0, 0, 0)$ AND $B(4, 6, 2)$.

Solution THE MIDPOINT OF \overline{AB} WILL BE AT THE POINT M WHOSE COORDINATES ARE

$$\left(\frac{0+4}{2}, \frac{0+6}{2}, \frac{0+2}{2} \right) = (2, 3, 1).$$

THAT IS, $M(2, 3, 1)$ IS THE MIDPOINT OF \overline{AB} .

Example 2 FIND THE MIDPOINT OF THE LINE SEGMENT WITH ENDPOINTS
 $P(-1, 3, -3)$ AND $Q(1, 5, 7)$.

Solution THE MIDPOINT OF \overline{PQ} IS AT THE POINT M WHOSE COORDINATES ARE

$$\left(\frac{-1+1}{2}, \frac{3+5}{2}, \frac{-3+7}{2} \right) = (0, 4, 2).$$

SO, THE POINT $M(0, 4, 2)$ IS THE MIDPOINT OF \overline{PQ} .

Exercise 6.3

1 FIND THE MIDPOINT OF THE LINE SEGMENT WITH ENDPOINTS

A $A(1, 3, 5)$ AND $B(3, 1, 1)$

B $P(0, -2, 2)$ AND $Q(-4, 2, 4)$

C $C\left(\frac{1}{2}, 3, 0\right)$ AND $D\left(\frac{3}{4}, -1, 1\right)$

D $R(0, 9, 0)$ AND $S(0, 0, 8)$

E $T(-2, -3, -5)$ AND $U(-1, -1, -7)$

F $G(6, 0, 0)$ AND $H(0, -4, -2)$

G $M\left(\frac{1}{2}, \frac{1}{3}, -1\right)$ AND $K\left(-\frac{1}{2}, \frac{1}{4}\right)$

2 IF THE MIDPOINT OF A LINE SEGMENT IS AT $M(0, 0, 0)$ AND ONE OF ITS ENDPOINTS IS AT $R(-3, 2, 4)$, FIND THE COORDINATES OF THE OTHER ENDPOINT.

6.5 EQUATION OF SPHERE

ACTIVITY 6.5



WHEN THE CENTRE OF A CIRCLE IS AT THE ORIGIN OF THE COORDINATE SPACE AND ITS RADIUS IS r , THE EQUATION OF THE CIRCLE IS GIVEN BY $x^2 + y^2 = r^2$.

HERE NOTICE THAT O IS THE CENTRE AND P IS ANY POINT ON THE CIRCLE AND OP IS THE RADIUS OF THE CIRCLE OR THE DISTANCE FROM THE CENTRE O TO P .

NOW USING SIMILAR NOTIONS:

- 1 DEFINE A SPHERE WHOSE CENTRE IS AT O .
- 2 **A** FIND THE EQUATION OF THE SPHERE WHOSE CENTRE IS AT THE ORIGIN, AND HAS RADIUS $r = 2$.
B IF A POINT $P(x, y, z)$ IS ON THE SURFACE OF THIS SPHERE, WHAT IS THE DISTANCE OF P FROM THE CENTRE OF THE SPHERE?
- 3 IF THE CENTRE OF A SPHERE IS AT THE ORIGIN, WHAT IS THE DISTANCE OF A POINT $P(3, 4, 0)$ ON THE SURFACE OF THE SPHERE FROM THE ORIGIN?

NOW, LET US CONSIDER A SPHERE WHOSE CENTRE IS AT THE ORIGIN OF A COORDINATE SYSTEM. WHOSE RADIUS IS r . THEN, IF $P(x, y, z)$ IS ANY POINT ON THE SURFACE OF THE SPHERE, THE LENGTH OF OP IS THE RADIUS OF THAT SPHERE. IN THE DISCUSSION ABOVE, YOU HAVE SEEN THAT THE LENGTH OF OP IS GIVEN BY $\sqrt{x^2 + y^2 + z^2}$. THEREFORE, EVERY POINT P ON THE SPHERE SATISFIES THE EQUATION $x^2 + y^2 + z^2 = r^2$.

THAT MEANS, IF THE CENTRE OF A SPHERE IS AT THE ORIGIN OF THE COORDINATE SPACE AND RADIUS IS r , THE EQUATION OF SUCH A SPHERE IS GIVEN BY

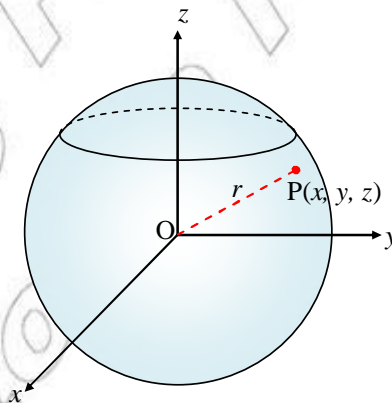


Figure 6.11

Example 1 WRITE THE EQUATION OF THE SPHERE WHOSE CENTRE IS AT THE ORIGIN AND WHOSE RADIUS IS 3 UNITS.

Solution IF $P(x, y, z)$ IS ANY POINT ON THE SPHERE, ITS DISTANCE FROM THE ORIGIN (THE CENTRE) IS GIVEN BY $\sqrt{x^2 + y^2 + z^2}$. SUBSTITUTING 3, WE GET THE EQUATION OF THE SPHERE TO BE $\sqrt{x^2 + y^2 + z^2} = 3$, WHICH IS EQUIVALENT TO $x^2 + y^2 + z^2 = 9$.

THEREFORE, THE EQUATION OF THE SPHERE WILL BE

NOW LET US CONSIDER A SPHERE WHOSE CENTRE IS NOT AT THE ORIGIN BUT AT ANY OTHER $C(a, b, c)$ IN SPACE. IF $P(x, y, z)$ IS ANY POINT ON THE SURFACE OF THE SPHERE, THEN THE RADIUS OF THE SPHERE WILL BE THE LENGTH OF

THAT MEANS, IN THIS CASE $\sqrt{(x-a)^2 + (y-b)^2 + (z-c)^2}$

THEREFORE, THE EQUATION OF THE SPHERE IN THIS CASE IS

$$(x-a)^2 + (y-b)^2 + (z-c)^2 = r^2$$

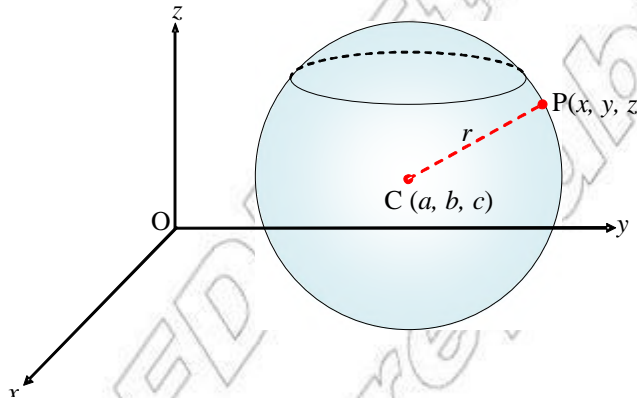


Figure 6.12

Example 2 WRITE THE EQUATION OF THE SPHERE WITH CENTRE AT $C(1, 2, 3)$ AND RADIUS 4 UNITS.

Solution IF $P(x, y, z)$ IS ANY POINT ON THE SURFACE OF THE SPHERE, THEN THE DISTANCE FROM THE CENTRE C TO THE POINT P IS GIVEN TO BE THE RADIUS OF THE SPHERE

THAT MEANS $\sqrt{(x-1)^2 + (y-2)^2 + (z-3)^2}$

SUBSTITUTING 4 AND SQUARING BOTH SIDES, YOU GET THE EQUATION OF THE SPHERE TO

$$(x-1)^2 + (y-2)^2 + (z-3)^2 = 16.$$

OBSERVE THAT WHEN THE CENTRE IS AT THE ORIGIN $(0, 0, 0)$ THE EQUATION

$$(x-a)^2 + (y-b)^2 + (z-c)^2 = r^2 \text{ REDUCES TO THE FORM } x^2 + y^2 + z^2 = r^2.$$

(SUBSTITUTING (a, b, c) BY $(0, 0, 0)$).

THAT MEANS THE EQUATION OF A SPHERE GIVEN BY $(x-a)^2 + (y-b)^2 + (z-c)^2 = r^2$, WHERE r IS THE RADIUS AND (a, b, c) IS THE CENTRE CAN BE APPLIED TO A SPHERE WHOSE CENTRE IS AT ANY POINT (INCLUDING THE ORIGIN).

Example 3 GIVEN THE EQUATION OF A SPHERE TO BE $x^2 + y^2 + z^2 = 9$, WHAT CAN YOU SAY ABOUT THE POINTS:

- A** $P(1, 2, 2)$? **B** $Q(0, 1, 2)$? **C** $R(1, 3, 2)$?

Solution CLEARLY THE CENTRE OF THE SPHERE IS AT THE ORIGIN AND ITS RADIUS IS 3.

- A** BECAUSE THE DISTANCE OF P FROM THE CENTRE IS LESS THAN 3, P IS INSIDE THE SPHERE.
B BECAUSE THE DISTANCE OF Q FROM THE CENTRE IS LESS THAN 3, Q IS INSIDE THE SPHERE.
C BECAUSE THE DISTANCE OF R FROM THE CENTRE IS GREATER THAN 3, R IS OUTSIDE THE SPHERE.

In general, if O is the centre of a sphere and r is its radius, then for any point P taken in space, we have one of the following three possibilities.

- I** $OP = r$, IN WHICH CASE P IS ON THE SURFACE OF THE SPHERE;
- II** $OP < r$, IN WHICH CASE P IS INSIDE THE SPHERE; AND
- III** $OP > r$, IN WHICH CASE P IS OUTSIDE THE SPHERE.

Exercise 6.4

- 1** WRITE THE EQUATION OF A SPHERE OF RADIUS 4 WHOSE CENTRE IS $A(3, 0, 5)$.
- 2** GIVEN THE EQUATION OF A SPHERE TO BE $6x - 4y - 10z = -22$, FIND THE CENTRE AND RADIUS OF THE SPHERE.
- 3** IF $A(0, 0, 0)$ AND $B(4, 6, 0)$ ARE END POINTS OF A DIAMETER OF A SPHERE, WRITE ITS EQUATION.
- 4** HOW FAR IS THE POINT $P(2, 3)$ FROM THE SPHERE WHOSE EQUATION IS $(x - 1)^2 + (y + 2)^2 + z^2 = 1$?
- 5** IF THE CENTRE OF A SPHERE IS AT THE ORIGIN AND ITS RADIUS IS 5, DETERMINE WHICH OF THE FOLLOWING POINTS LIE INSIDE OR OUTSIDE OR ON THE SPHERE.
 $A(2, 1, 2)$ $B(-3, 2, 4)$ $C(5, 8, 6)$ $D(0, 8, 6)$ $E(-8, -6, 0)$
- 6** DECIDE WHETHER OR NOT EACH OF THE FOLLOWING POINTS LIE INSIDE OR ON THE SPHERE WHOSE EQUATION IS $x^2 + y^2 + z^2 + 2x - y + z = 0$.
A $O(0, 0, 0)$ **B** $P(-1, 0, 1)$ **C** $Q(0, \frac{1}{2}, 0)$
- 7** **A** STATE THE COORDINATES OF ANY POINT IN SPACE WHICH IS 4 UNITS FROM THE ORIGIN.
B FIND THE COORDINATES OF TWO POINTS WHICH ARE 5 UNITS FROM THE POINT $P(-1, -1, 2)$.

6.6 VECTORS IN SPACE

RECALL THAT A VECTOR QUANTITY IS A QUANTITY THAT HAS BOTH MAGNITUDE AND DIRECTION. VELOCITY AND FORCE ARE EXAMPLES OF VECTOR QUANTITIES. ON THE OTHER HAND, A QUANTITY WITH MAGNITUDE ONLY BUT NO DIRECTION IS CALLED A SCALAR QUANTITY. FOR EXAMPLE, MASS AND LENGTH ARE EXAMPLES OF SCALAR QUANTITIES.

ACTIVITY 6.6

- 1 HOW DO YOU REPRESENT A VECTOR ON A PLANE?
- 2 HOW DO YOU REPRESENT THE MAGNITUDE OF A VECTOR?
- 3 HOW DO YOU SHOW THE DIRECTION OF A VECTOR?
- 4 HOW DO YOU EXPRESS THE VECTOR IN FIGURE 6.13 BELOW USING THE STANDARD UNIT VECTORS \mathbf{i} AND \mathbf{j} ?

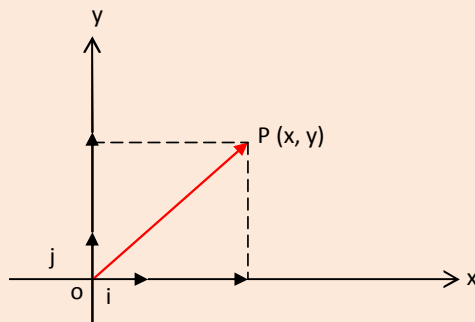


Figure 6.13

RECALL ALSO THAT THE VECTOR CAN BE NAMED USING A SINGLE LETTER OR A BOLD LETTER. ALSO THAT $\vec{a} = x\mathbf{i} + y\mathbf{j}$

OPERATIONS ON VECTORS CAN BE PERFORMED USING THEIR COMPONENTS OR THE COORDINATES OF THEIR TERMINAL POINTS WHEN THEIR INITIAL POINTS, ARE AT THE ORIGIN OF THE COORDINATE SYSTEM.

Example 1 IF $\vec{a} = 2\mathbf{i} + 4\mathbf{j}$ AND $\vec{b} = 5\mathbf{i} + 3\mathbf{j}$, THEN FIND

- I $\vec{a} + \vec{b}$ II $\vec{a} - \vec{b}$

Solution

I $\vec{a} + \vec{b} = (2\mathbf{i} + 4\mathbf{j}) + (5\mathbf{i} + 3\mathbf{j}) = (2+5)\mathbf{i} + (4+3)\mathbf{j} = 7\mathbf{i} + 7\mathbf{j}$

II $\vec{a} - \vec{b} = (2\mathbf{i} + 4\mathbf{j}) - (5\mathbf{i} + 3\mathbf{j}) = (2-5)\mathbf{i} + (4-3)\mathbf{j} = -3\mathbf{i} + \mathbf{j}$

NOTICE THAT THE TERMINAL POINTS OF THE VECTORS \vec{a} AND \vec{b} ARE (2, 4) AND (5, 3) RESPECTIVELY, WHILE THE TERMINAL POINT OF $\vec{a} + \vec{b}$ IS (7, 7) WHICH CAN BE OBTAINED BY ADDING THE CORRESPONDING COORDINATES OF THE TERMINAL POINTS OF THE TWO VECTORS. LOOK FIGURE 6.13 BELOW.

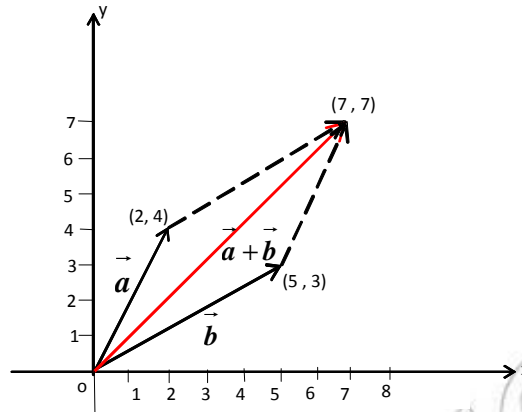


Figure 6.14

IN YOUR PREVIOUS STUDIES, YOU HAVE ALSO LEARNED ABOUT THE SCALAR OR DOT PRODUCT OF TWO VECTORS. THAT IS, IF \vec{a} AND \vec{b} ARE TWO VECTORS, THEIR DOT OR SCALAR PRODUCT AND DENOTED BY IS DEFINED AS:

$(\vec{a}) \cdot (\vec{b}) = |\vec{a}| |\vec{b}| \cos \theta$, WHERE $|\vec{a}|$ AND $|\vec{b}|$ ARE THE MAGNITUDES OF THE TWO VECTORS RESPECTIVELY.

Example 2 COMPUTE THE SCALAR PRODUCT OF THE VECTORS $3\vec{i} + 0\vec{j}$.

Solution BY PICTURING A DIAGRAM, THE ANGLE BETWEEN THE TWO VECTORS IS 45

$$\text{THEN } |\vec{a}| = \sqrt{3^2 + 3^2} = 3\sqrt{2} \text{ AND } |\vec{b}| = \sqrt{4^2 + 0^2} = 4$$

$$\text{THUS } \vec{a} \cdot \vec{b} = |\vec{a}| \cdot |\vec{b}| \cos \theta = 3\sqrt{2} (4) \cos 45 = 12.$$

OR

$$\begin{aligned} \vec{a} \cdot \vec{b} &= (3\vec{i} + 3\vec{j}) \cdot (4\vec{i} + 0\vec{j}) = (3 \times 4)\vec{i} \cdot \vec{i} + (3 \times 0)\vec{i} \cdot \vec{j} + (3 \times 4)\vec{j} \cdot \vec{i} + (3 \times 0)\vec{j} \cdot \vec{j} \\ &= 12 + 0 + 0 + 0 = 12. \end{aligned}$$

The notion of vectors in space

JUST AS YOU WORKED WITH VECTORS ON A PLANE BY USING THE COORDINATES OF THEIR POINTS, YOU CAN HANDLE VECTORS IN A THREE DIMENSIONAL SPACE WITH THE HELP OF COORDINATES OF THE TERMINAL POINTS.

NOW, LET THE INITIAL POINT OF A VECTOR IN SPACE BE THE ORIGIN O OF THE COORDINATE SYSTEM. THEN THE VECTOR CAN BE EXPRESSED AS THE SUM OF ITS THREE COMPONENTS IN THE DIRECTIONS OF THE AXES, IN THE FORM:

$\vec{OA} = xi + yj + zk$ WHERE $\mathbf{i} = (1,0,0)$, $\mathbf{j} = (0,1,0)$ AND $\mathbf{k} = (0,0,1)$ ARE STANDARD UNIT VECTORS IN THE DIRECTIONS OF THE POSITIVE X, Y AND Z AXES, RESPECTIVELY. LOOK AT FIGURE 6.15 BELOW.

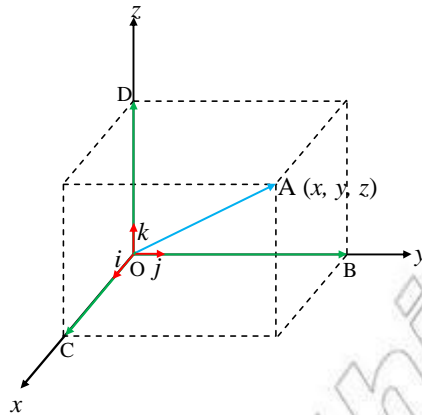


Figure 6.15

DO YOU OBSERVE THAT THE VECTOR IS THE SUM OF THE THREE PERPENDICULAR VECTORS \vec{OC} , \vec{OB} AND \vec{OD} ?

Example 3 IF THE INITIAL POINT OF A VECTOR IN SPACE IS AT THE ORIGIN AND ITS TERMINAL POINT HEAD IS AT P(3, 5, 4), SHOW THE VECTOR USING A COORDINATE SYSTEM AND IDENTIFY ITS THREE PERPENDICULAR COMPONENTS IN THE DIRECTIONS OF THE THREE AXES.

Solution THE THREE COMPONENTS ARE THE VECTORS WITH COMMON INITIAL POINT O(0, 0, 0) AND TERMINAL POINTS A(3, 0, 0) ON THE X-AXIS, B(0, 5, 0) ON THE Y-AXIS AND C(0, 0, 4) ON THE Z-AXIS AS SHOWN IN FIGURE 6.16

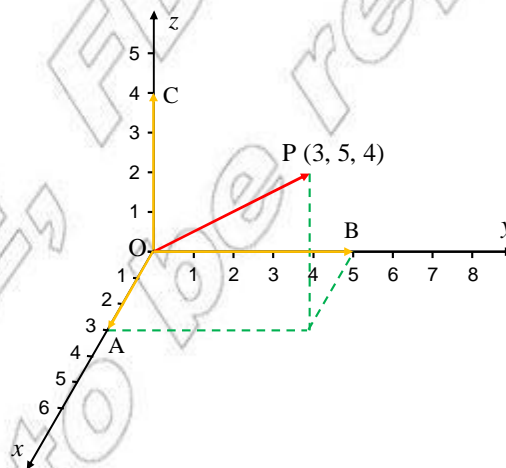


Figure 6.16

THAT MEANS $\vec{OP} = \vec{OA} + \vec{OB} + \vec{OC}$ OR IN TERMS OF THE UNIT VECTORS,
 $(3, 5, 4) = 3\mathbf{i} + 5\mathbf{j} + 4\mathbf{k} = (3, 0, 0) + (0, 5, 0) + (0, 0, 4)$

Addition and subtraction of vectors

JUST AS WITH VECTORS ON A PLANE, VECTORS IN SPACE CAN BE ADDED USING THE COORDINATES OF THEIR TERMINAL POINTS WHEN THEIR INITIAL POINTS ARE AT THE ORIGIN. IF \vec{a} AND \vec{b} ARE VECTORS IN SPACE WITH THEIR INITIAL POINTS AT THE ORIGIN AND THEIR TERMINAL POINTS AT (x_1, y_1, z_1) AND (x_2, y_2, z_2) , RESPECTIVELY, THEN THE VECTOR WITH INITIAL POINT AT THE ORIGIN AND TERMINAL POINT AT $(x_1 + x_2, y_1 + y_2, z_1 + z_2)$.

HERE, IT IS ADVANTAGEOUS TO NOTE THAT A VECTOR WITH INITIAL POINT AT THE ORIGIN AND TERMINAL POINT AT POINT P IN SPACE IS SHORTLY EXPRESSED AS $\vec{OP} = (x, y, z)$.

THUS $\vec{v} = (3, 2, -4)$ IS THE VECTOR IN SPACE WITH INITIAL POINT AT THE ORIGIN AND TERMINAL POINT AT $(3, 2, -4)$.

Example 4 IF $\vec{a} = (1, 3, 2)$ AND $\vec{b} = (3, -1, 4)$, FIND THE SUM VECTOR

Solution AS EXPLAINED ABOVE, THE SUM OF THE TWO VECTORS IS DONE BY ADDING THE CORRESPONDING COORDINATES OF THE TERMINAL POINTS OF THE TWO VECTORS.

THAT IS $\vec{a} + \vec{b} = (1, 3, 2) + (3, -1, 4) = (4, 2, 6)$ WHICH MEANS THAT THE VECTOR WHOSE INITIAL POINT IS THE ORIGIN AND WHOSE TERMINAL POINT IS AT $(4, 2, 6)$.

SUBTRACTION OF A VECTOR FROM A VECTOR IS ALSO DONE IN A SIMILAR WAY. SO IF GIVEN TWO VECTORS $\vec{a} = (x_1, y_1, z_1)$ AND $\vec{b} = (x_2, y_2, z_2)$ THEN $\vec{a} - \vec{b}$ IS THE VECTOR $\vec{c} = (x_1 - x_2, y_1 - y_2, z_1 - z_2)$.

Example 5 IF $\vec{a} = (5, 2, 3)$ AND $\vec{b} = (3, 1, 4)$ THEN FIND $\vec{a} - \vec{b}$ AND $\vec{b} - \vec{a}$

Solution

$$I \quad \vec{a} - \vec{b} = (5, 2, 3) - (3, 1, 4) = (5-3, 2-1, 3-4) = (2, 1, -1)$$

THAT MEANS $\vec{a} - \vec{b}$ IS THE VECTOR WITH INITIAL POINT AT THE ORIGIN AND TERMINAL POINT AT $(2, 1, -1)$ IN SPACE.

$$II \quad \vec{b} - \vec{a} = (3, 1, 4) - (5, 2, 3) = (3-5, 1-2, 4-3) = (-2, -1, 1).$$

DO YOU SEE THAT $\vec{b} - \vec{a} = -(\vec{a} - \vec{b})$?

Multiplication of a vector by a scalar

IF $\vec{a} = (x, y, z)$ THEN OBSERVE THAT

$$2\vec{a} = \vec{a} + \vec{a} = (x, y, z) + (x, y, z) = (x + x, y + y, z + z) = (2x, 2y, 2z).$$

THUS, IT WILL BE REASONABLE TO ACCEPT THE FOLLOWING: IF \vec{a} IS A VECTOR AND ANY SCALAR (A NUMBER), THEN

$k\vec{a} = (kx, ky, kz)$ WHICH IS A VECTOR WITH INITIAL POINT AT THE ORIGIN AND TERMINAL POINT AT (kx, ky, kz) .

Example 6 IF $\vec{a} = (4, 2, 3)$, THEN

A $3\vec{a} = (12, 6, 9)$

B $-\vec{a} = (-4, -2, -3)$

C $-2\vec{a} = (-8, -4, -6)$

D $\frac{1}{2}\vec{a} = (2, 1, \frac{3}{2})$

Properties of addition of vectors

SINCE VECTOR ADDITION IS DONE USING THE COORDINATE POINTS OF THE ADDEND VECTORS, WHICH ARE REAL NUMBERS, YOU CAN EASILY VERIFY THE FOLLOWING PROPERTIES OF VECTOR ADDITION.

I Vector addition is commutative

FOR ANY TWO VECTORS $\vec{a} = (x_1, y_1, z_1)$ AND $\vec{b} = (x_2, y_2, z_2)$ IN SPACE,

$\vec{a} + \vec{b} = \vec{b} + \vec{a}$. TO SEE THIS, LET US LOOK AT THE FOLLOWING.

$$\begin{aligned}\vec{a} + \vec{b} &= (x_1, y_1, z_1) + (x_2, y_2, z_2) = (x_1 + x_2, y_1 + y_2, z_1 + z_2) = (x_2 + x_1, y_2 + y_1, z_2 + z_1) \text{ Why?} \\ &= (x_2, y_2, z_2) + (x_1, y_1, z_1) = \vec{b} + \vec{a}\end{aligned}$$

II Vector addition is associative

FOR ANY THREE VECTORS IN SPACE, $\vec{a} + (\vec{b} + \vec{c}) = (\vec{a} + \vec{b}) + \vec{c}$

III FOR TWO VECTORS AND ANY SCALAR k , $k(\vec{a} + \vec{b}) = k\vec{a} + k\vec{b}$.

Magnitude of a vector

AT THE BEGINNING OF THE DISCUSSION ABOUT VECTORS IN SPACE, WE OBSERVED THAT A VECTOR IS USUALLY REPRESENTED BY AN ARROW, WHERE THE ARROW HEAD INDICATES THE DIRECTION AND THE LENGTH OF THE ARROW REPRESENTS THE MAGNITUDE OF THE VECTOR. THUS, TO FIND THE MAGNITUDE OF A VECTOR, IT WILL BE SUFFICIENT TO FIND THE DISTANCE BETWEEN THE INITIAL POINT AND THE TERMINAL POINT OF THE VECTOR IN THE COORDINATE SPACE.

FOR EXAMPLE, IF THE INITIAL POINT OF A VECTOR IS AT THE ORIGIN OF THE COORDINATE SPACE AND THE TERMINAL POINT IS AT $P(3, 2, 4)$ THEN THE MAGNITUDE OF THE VECTOR IS THE DISTANCE

FROM O TO P. THIS IS, AS YOU KNOW, $\sqrt{3^2 + 2^2 + 4^2} = \sqrt{29}$

THUS, IN GENERAL, IF THE INITIAL POINT OF A VECTOR IS AT THE ORIGIN AND ITS TERMINAL POINT IS AT A POINT $Q(x, y, z)$ OR IF $\vec{v} = x\mathbf{i} + y\mathbf{j} + z\mathbf{k}$, THEN MAGNITUDE OF THE VECTOR IS

AND IS GIVEN BY $\sqrt{x^2 + y^2 + z^2}$. THAT IS,

$$|\vec{v}| = \sqrt{x^2 + y^2 + z^2}$$

IF THE INITIAL POINT OF A VECTOR IS AT $P(x_1, y_1, z_1)$ AND THE TERMINAL POINT IS AT $Q(x_2, y_2, z_2)$, THEN

$$|\vec{v}| = \sqrt{(x_2 - x_1)^2 + (y_2 - y_1)^2 + (z_2 - z_1)^2}$$

Scalar or dot product of vectors in space

WHEN YOU WERE STUDYING VECTORS ON A PLANE, THE SCALAR PRODUCT (SCALAR PRODUCT) OF TWO VECTORS WAS DEFINED BY:

$\vec{a} \cdot \vec{b} = |\vec{a}| |\vec{b}| \cos \theta$ WHERE θ IS THE ANGLE BETWEEN THE TWO VECTORS. IN PARTICULAR, FOR TWO UNIT VECTORS \vec{i} AND \vec{j} , YOU KNOW THAT $|\vec{i}| = |\vec{j}| = 1$ AND FROM THE DEFINITION OF THE DOT PRODUCT, YOU EASILY SEE THAT $\vec{i} \cdot \vec{j} = 0 = \vec{j} \cdot \vec{i}$. SO, IF $\vec{a} = (x_1, y_1)$, AND $\vec{b} = (x_2, y_2)$

THE DOT PRODUCT $\vec{a} \cdot \vec{b} \in \mathbb{R}$ CAN BE VERIFIED VERY EASILY.

THE DOT (SCALAR) PRODUCT OF TWO VECTORS IN SPACE IS JUST AN EXTENSION OF THE DOT PRODUCT OF VECTORS ON A PLANE. THAT IS, IF \vec{a} AND \vec{b} ARE NOW TWO VECTORS IN SPACE, THE DOT (SCALAR) PRODUCT DENOTED BY $\vec{a} \cdot \vec{b}$ IS DEFINED AS:

$\vec{a} \cdot \vec{b} = |\vec{a}| \cdot |\vec{b}| \cos \theta$ WHERE θ IS ONCE AGAIN THE ANGLE BETWEEN THE TWO VECTORS. OBSERVE THAT THIS IS A REAL NUMBER AND IN PARTICULAR IF

$\vec{a} = (x_1, y_1, z_1) = x_1\vec{i} + y_1\vec{j} + z_1\vec{k}$ AND $\vec{b} = (x_2, y_2, z_2) = x_2\vec{i} + y_2\vec{j} + z_2\vec{k}$, YOU SEE THAT, THE DISTRIBUTIVE PROPERTY OF MULTIPLICATION OVER ADDITION ENABLES YOU TO FIND:

$$\vec{a} \cdot \vec{b} = (x_1\vec{i} + y_1\vec{j} + z_1\vec{k}) \cdot (x_2\vec{i} + y_2\vec{j} + z_2\vec{k}) = x_1x_2 + y_1y_2 + z_1z_2.$$

HERE IT IS IMPORTANT TO NOTE THAT FOR UNIT VECTORS

$\vec{i} \cdot \vec{i} = \vec{j} \cdot \vec{j} = \vec{k} \cdot \vec{k} = 1$ WHILE $\vec{i} \cdot \vec{j} = \vec{i} \cdot \vec{k} = \vec{k} \cdot \vec{j} = 0$ THE REASON BEING THAT THE MAGNITUDE OF A UNIT VECTOR IS ONE, $\cos 0 = 1$ AND $\cos 90 = 0$.

Example 7 IF $\vec{a} = (2, 3, -1)$ AND $\vec{b} = (-1, 0, 2)$, THEN FIND THE SCALAR (DOT) PRODUCT OF \vec{a} AND \vec{b} .

Solution $\vec{a} \cdot \vec{b} = x_1x_2 + y_1y_2 + z_1z_2 = 2(-1) + 3(0) + (-1)(2) = -4$

Example 8 IF $\vec{a} = (2, 0, 2)$ AND $\vec{b} = (0, 3, 0)$ FIND THEIR DOT PRODUCT.

Solution $\vec{a} \cdot \vec{b} = x_1x_2 + y_1y_2 + z_1z_2 = 2(0) + 0(3) + 2(0) = 0$

OBSERVE THAT $(2, 0, 2)$ AND $(0, 3, 0)$ ARE PERPENDICULAR VECTORS I.E. THE ANGLE BETWEEN THEM IS 90°

Exercise 6.5

1 CALCULATE THE MAGNITUDE OF EACH OF THE FOLLOWING VECTORS.

A $(-1, 3, 0)$ **B** $(3, 1, -1)$ **C** $\left(\frac{1}{2}, \frac{3}{2}, \frac{4}{5}\right)$

2 FIND THE SCALAR (DOT) PRODUCT OF EACH OF THE FOLLOWING PAIRS OF VECTORS.

A $(2, -3, 1)$ AND $(1, 0, 4)$ **B** $(-5, 0, 1)$ AND $(1, -3, -2)$
C $(-2, 2, 0)$ AND $(0, 0, -1)$ **D** $(0, 0, 3)$ AND $(0, 0, 3)$

Angle between two vectors in space

FOR TWO VECTORS \vec{a} AND \vec{b} WITH INITIAL POINT AT THE ORIGIN, THEIR DOT PRODUCT IS DEFINED BY $\vec{a} \cdot \vec{b} = |\vec{a}| |\vec{b}| \cos \theta$ WHERE θ IS THE ANGLE BETWEEN THE TWO VECTORS, ASSUMING THAT BOTH VECTORS HAVE THE SAME INITIAL POINT AT THE ORIGIN. THEN YOU CAN REWRITE THE ABOVE EQUATION IN THE FORM:

$$\cos \theta = \frac{\vec{a} \cdot \vec{b}}{|\vec{a}| |\vec{b}|}$$

HENCE THE ANGLE BETWEEN THE TWO VECTORS CAN BE OBTAINED USING THIS LAST FORM PROVIDED THE VECTORS ARE NON-ZERO.

Example 9 FIND THE ANGLE BETWEEN THE VECTORS $\vec{a} = (2, 0, 0)$ AND $\vec{b} = (0, 0, 3)$.

Solution
$$\cos \theta = \frac{\vec{a} \cdot \vec{b}}{|\vec{a}| |\vec{b}|}$$

BUT $\vec{a} \cdot \vec{b} = 2(0) + (0)(0) + 0(3) = 0$

$|\vec{a}| = \sqrt{2^2 + 0^2 + 0^2} = \sqrt{2}$ AND $|\vec{b}| = \sqrt{0^2 + 0^2 + 3^2} = 3$

THEREFORE $\cos \theta = \frac{0}{2(3)} = 0 \Rightarrow \theta = 90^\circ$

NOTICE THAT, THE VECTOR $(2, 0, 0)$ IS ALONG THE X-AXIS WHILE THE VECTOR $(0, 0, 3)$ IS ALONG THE Z-AXIS AND THE TWO AXES ARE PERPENDICULAR TO EACH OTHER.

Example 10 FIND THE ANGLE BETWEEN THE VECTORS $\vec{a} = (1, 1, 0)$ AND $\vec{b} = (1, 1, 0)$.

Solution
$$\cos \theta = \frac{\vec{a} \cdot \vec{b}}{|\vec{a}| |\vec{b}|}$$

BUT $\vec{a} \cdot \vec{b} = 1(1) + 1(1) + 0(0) = 2$

$|\vec{a}| = \sqrt{1^2 + 1^2 + 0^2} = \sqrt{2}$ AND $|\vec{b}| = \sqrt{1^2 + 1^2 + 0^2} = \sqrt{2}$

THEREFORE $\cos \theta = \frac{2}{\sqrt{2} \cdot \sqrt{2}} = \frac{2}{2} = 1 \Rightarrow \theta = 0^\circ$

NOTICE THAT THE VECTOR $(1, 1, 0)$ LIES ON THE XY-PLANE AND THE VECTOR $(1, 1, 0)$ LIES ON THE XY-PLANE, EACH FORMING A 45° ANGLE WITH THE X-AXIS.

Exercise 6.6

- 1** IF THE VECTORS \vec{a} , \vec{b} , \vec{v} AND \vec{u} ARE AS GIVEN BELOW:
 $\vec{a} = (1, 3, 2)$, $\vec{b} = (0, -3, 4)$, $\vec{v} = (-4, 3, -2)$, $\vec{u} = (\frac{1}{2}, 0, -3)$, THEN FIND EACH OF THE FOLLOWING VECTORS.
A $\vec{a} + \vec{b}$ **B** $\vec{b} + \vec{a}$ **C** $\vec{a} - \vec{b}$ **D** $\vec{b} - \vec{a}$
E $\vec{a} + \vec{b} + \vec{v}$ **F** $\vec{b} + \vec{v} - \vec{u}$ **G** $\vec{a} + \vec{b} + \vec{v} + \vec{u}$
- 2** IF THE VECTORS \vec{a} , \vec{b} , \vec{v} AND \vec{u} ARE AS GIVEN IN QUESTION 1 ABOVE, THEN FIND
A $3\vec{a}$ **B** $-4\vec{b}$ **C** $2\vec{a} + 3\vec{b}$ **D** $3\vec{b} - \frac{1}{2}\vec{a} + 2\vec{v}$
- 3** VERIFY THAT VECTOR ADDITION IS ASSOCIATIVE FOR ANY THREE VECTORS \vec{a} , \vec{b} AND \vec{c} IN SPACE, SHOW THAT $(\vec{a} + \vec{b}) + \vec{c} = \vec{a} + (\vec{b} + \vec{c})$
- 4** FOR ANY TWO VECTORS \vec{a} AND \vec{b} IN SPACE AND ANY SCALAR k , SHOW THAT
 $k(\vec{a} + \vec{b}) = k\vec{a} + k\vec{b}$
- 5** WRITE EACH OF THE FOLLOWING VECTORS AS A SUM OF ITS COMPONENTS USING THE STANDARD UNIT VECTORS \hat{i} , \hat{j} AND \hat{k} .
A $(-4, 3, -2)$ **B** $(1, -3, \sqrt{2})$
C $(3, 5, -7)$ **D** $(0, 0, 3)$
- 6** SHOW EACH OF THE FOLLOWING VECTORS IN SPACE COORDINATE IN AN ARROW THAT STARTS FROM THE ORIGIN.
A $\vec{a} = (3, 3, 3)$ **B** $\vec{b} = (-3, 3, 4)$ **C** $\vec{c} = (2, -3, -3)$
- 7** CALCULATE THE MAGNITUDE OF EACH OF THE VECTORS ABOVE.
- 8** FIND THE SCALAR (DOT) PRODUCT OF EACH OF THE FOLLOWING PAIRS OF VECTORS.
A $(1, 0, 1)$ AND $(2, 2, 0)$ **B** $(-2, 5, 1)$ AND $(1, -1, -2)$
C $(\frac{1}{2}, \frac{1}{2}, \frac{1}{2})$ AND $(\frac{3}{2}, -\frac{3}{2}, -\frac{1}{2})$ **D** $(1, 0, 1)$ AND $(-1, 1, 0)$
E $(5, 0, 0)$ AND $(0, -5, 0)$ **F** $(2, 2, 2)$ AND $(-1, -1, -1)$
- 9** FIND THE ANGLE BETWEEN EACH OF THE FOLLOWING PAIRS OF VECTORS.
A $(2, 0, 1)$ AND $(0, -1, 0)$ **B** $(1, 1, 1)$ AND $(1, 0, 1)$
C $(-1, 1, 1)$ AND $(2, 2, 2)$



Key Terms

angle between two vectors
 concurrent edges of a rectangular box
 coordinate planes
 coordinate system
 diagonal of a rectangular box
 dot product of vectors
 magnitude of a vector
 mutually perpendicular lines
 octants
 ordered triples of real numbers
 reference axes
 unit vectors
 vector in space



Summary

- THREE MUTUALLY PERPENDICULAR LINES IN SPACE DIVIDE THE SPACE INTO EIGHT OCTANTS.
- IF (x, y, z) ARE THE COORDINATES OF A POINT P IN SPACE, THEN
 - ✓ x IS THE DIRECTED DISTANCE OF THE POINT P FROM THE yz -PLANE.
 - ✓ y IS THE DIRECTED DISTANCE OF THE POINT P FROM THE xz -PLANE.
 - ✓ z IS THE DIRECTED DISTANCE OF THE POINT P FROM THE xy -PLANE.
- THERE IS A ONE TO ONE CORRESPONDENCE BETWEEN THE SET OF ALL POINTS OF THE SPACE AND THE SET OF ALL ORDERED TRIPLES OF REAL NUMBERS.
- THE DISTANCE BETWEEN TWO POINTS $A(a, b, c)$ AND $B(x, y, z)$ IN SPACE IS GIVEN BY

$$d = \sqrt{(x-a)^2 + (y-b)^2 + (z-c)^2}.$$
 THUS THE DISTANCE OF A POINT $P(x, y, z)$ FROM THE ORIGIN O IS $\sqrt{x^2 + y^2 + z^2}$.
- THE MIDPOINT OF A LINE SEGMENT WITH END POINTS $A(a, b, c)$ AND $B(x, y, z)$ IN SPACE IS THE POINT $M\left(\frac{x+a}{2}, \frac{y+b}{2}, \frac{z+c}{2}\right)$.
- THE EQUATION OF A SPHERE WITH CENTRE AT $C(x_1, y_1, z_1)$ AND RADIUS r IS GIVEN BY

$$(x-x_1)^2 + (y-y_1)^2 + (z-z_1)^2 = r^2$$
 IN PARTICULAR, IF THE CENTRE IS AT THE ORIGIN O AND THE EQUATION BECOMES $x^2 + y^2 + z^2 = r^2$, WHERE (x, y, z) ARE COORDINATES OF ANY POINT ON THE SURFACE OF THE SPHERE.
- IN SPACE, IF THE INITIAL POINT OF A VECTOR IS AT THE ORIGIN O OF THE COORDINATE SYSTEM AND ITS TERMINAL POINT IS AT A POINT $A(x, y, z)$, THEN IT CAN BE EXPRESSED AS THE SUM OF ITS THREE COMPONENTS IN THE DIRECTIONS OF THE THREE AXES AS:

$$\vec{OA} = x\mathbf{i} + y\mathbf{j} + z\mathbf{k}$$
 WHERE $\mathbf{i} = (1, 0, 0)$, $\mathbf{j} = (0, 1, 0)$ AND $\mathbf{k} = (0, 0, 1)$ ARE THE STANDARD UNIT VECTORS IN THE DIRECTIONS OF THE POSITIVE x -AXIS, POSITIVE y -AXIS AND POSITIVE z -AXES RESPECTIVELY.

- 8** IN SPACE IF VECTORS \vec{a} AND \vec{b} HAVE THEIR INITIAL POINT AT THE ORIGIN AND THEIR TERMINAL POINTS AT $A(x_1, y_1, z_1)$ AND $B(x_2, y_2, z_2)$ RESPECTIVELY, THEN THEIR SUM $\vec{a} + \vec{b}$ IS A VECTOR WHOSE INITIAL POINT IS AT THE ORIGIN AND TERMINAL POINT IS AT $C(x_1 + x_2, y_1 + y_2, z_1 + z_2)$. SIMILARLY, THE DIFFERENCE $\vec{a} - \vec{b}$ IS THE VECTOR WHOSE INITIAL POINT IS AT THE ORIGIN AND TERMINAL POINT IS AT $D(x_1 - x_2, y_1 - y_2, z_1 - z_2)$.
- 9** IF THE INITIAL POINT OF A VECTOR IS AT THE ORIGIN AND THE TERMINAL POINT IS AT $P(x, y, z)$ THEN FOR ANY CONSTANT NUMBER k IT IS A VECTOR WHOSE INITIAL POINT IS AT THE ORIGIN AND TERMINAL POINT IS AT $Q(kx, ky, kz)$.
- 10** VECTOR ADDITION IS COMMUTATIVE AND ALSO ASSOCIATIVE.
- 11** MULTIPLICATION OF A VECTOR BY A SCALAR IS DISTRIBUTIVE OVER VECTOR ADDITION. FOR VECTORS \vec{a} AND \vec{b} AND A SCALAR k , $k(\vec{a} + \vec{b}) = k\vec{a} + k\vec{b}$.
- 12** THE MAGNITUDE OF A VECTOR WITH INITIAL POINT AT THE ORIGIN AND TERMINAL POINT AT $P(x, y, z)$ IS GIVEN BY:
- $$|\vec{a}| = \sqrt{x^2 + y^2 + z^2}$$
- 13** THE DOT (SCALAR) PRODUCT OF TWO VECTORS \vec{a} AND \vec{b} IS GIVEN BY $\vec{a} \cdot \vec{b} = |\vec{a}| |\vec{b}| \cos \theta$ WHERE θ IS THE ANGLE BETWEEN THE TWO VECTORS.
- 14** IF θ IS THE ANGLE BETWEEN TWO VECTORS \vec{a} AND \vec{b} THEN $\cos \theta = \frac{\vec{a} \cdot \vec{b}}{|\vec{a}| |\vec{b}|}$.



Review Exercises on Unit 6

- 1** LOCATE THE POSITION OF EACH OF THE FOLLOWING POINTS AND FIND THE DISTANCE OF EACH POINT FROM THE ORIGIN.
- | | | |
|----------------------|--|------------------------|
| A O(0,0, -3) | B P(0, -1, 2) | C Q(3,-1,4) |
| D R(-1,-2,-3) | E S(-3, -2, 3) | F T(-3, -3, -4) |
| G U(4, 3, -2) | H V(0, $-\frac{3}{2}$, $\frac{5}{2}$) | |
- 2** FIND THE DISTANCE OF THE POINT P (4, -3, 5) FROM THE
- | | | | |
|-----------------|-------------------|-------------------|-------------------|
| A ORIGIN | B xy-PLANE | C xz-PLANE | D yz-PLANE |
| E x-AXIS | F y-AXIS | G z-AXIS | |
- 3** FOR EACH OF THE FOLLOWING PAIRS OF POINTS, FIND THE DISTANCE FROM A TO B AND FIND THE MIDPOINT OF \overline{AB} .
- | | |
|------------------------------------|-------------------------------------|
| A A (-1,2,3) AND B (0,-1,1) | B A (3,-1,1) AND B (-1, 0,1) |
| C A (2,0,-3) AND B (2,-1,3) | D A (0,0,-4) AND B (4,0,0) |

- E** $A(-2, -1, -3)$ AND $B(2, 2, 1)$ **F** $A\left(\frac{1}{2}, \frac{1}{2}, -\frac{1}{2}\right)$ AND $B(10, 0, 11)$
- G** $A(\sqrt{2}, 5, 0)$ AND $B\left(0, \frac{1}{2}, \sqrt{3}\right)$ **H** $A(0, 0, -2)$ AND $B(0, 0, 5)$
- 4** FIND THE MIDPOINT OF THE LINE SEGMENT WHOSE END POINTS ARE
- A** $A(0, 0, 0)$ AND $B(4, 4, 4)$ **B** $C(-2, -2, -2)$ AND $D(2, 2, 2)$
- C** $P(6, 0, 0)$ AND $Q(0, 4, 0)$ **D** $R(2\sqrt{2}, -4, 0)$ AND $S(2\sqrt{2}, 0, -5)$
- 5** SHOW THAT $A(0, 4, 6, 5)$ AND $C(1, 4, 3)$ ARE VERTICES OF AN ISOSCELES TRIANGLE.
- 6** DETERMINE THE NATURAL LENGTHS OF THE EDGES, IF THE VERTICES ARE AT:
- A** $A(2, -1, 7), B(3, 1, 4)$ AND $C(5, 4, 5)$
- B** $A(0, 0, 3), B(2, 8, 1)$ AND $C(-9, 6, 18)$
- C** $A(1, 0, -3), B(2, 2, 0)$ AND $D(4, 6, 6)$
- D** $A(5, 6, -2), B(6, 12, 9)$ AND $C(2, 4, 2)$
- 7** MAKE A THREE DIMENSIONAL SKETCH SHOWING THE FOLLOWING VECTORS WITH INITIAL POINT AT THE ORIGIN.
- A** $\vec{a} = 2\mathbf{i} + \mathbf{j} + 3\mathbf{k}$, **B** $\vec{b} = -3\mathbf{i} + 4\mathbf{j} - \mathbf{k}$,
- C** $\vec{c} = -3\mathbf{i} + 5\mathbf{j} + 5\mathbf{k}$, **D** $\vec{d} = 4\mathbf{j} - 7\mathbf{k}$.
- 8** USING THE VECTORS DEFINED ABOVE, CALCULATE EACH OF THE FOLLOWING.
- A** $\vec{a} + \vec{b}$ **B** $2\vec{a} - \vec{c}$ **C** $\vec{b} + \vec{c} + \vec{d}$ **D** $2\vec{a} - 3\vec{b} + \vec{c}$
- 9** CALCULATE THE MAGNITUDE OF EACH OF THE VECTORS.
- 10** A SPHERE HAS CENTRE AT $C(-1, 2, 4)$ AND DIAMETER AB , AT $(-2, 1, 3)$. FIND THE COORDINATES OF B , THE RADIUS AND THE EQUATION OF THE SPHERE.
- 11** DECIDE WHETHER OR NOT EACH OF THE FOLLOWING IS A SPHERE. IF IT IS AN EQUATION OF A SPHERE, DETERMINE ITS CENTRE AND RADIUS.
- A** $x^2 + y^2 + z^2 - 2y = 4$ **B** $x^2 + y^2 + z^2 - x + 2y - 3z + 4 = 0$
- C** $x^2 + y^2 + z^2 - 2x + 4y - 6z + 13 = 0$
- 12** CALCULATE THE SCALAR (DOT) PRODUCT OF EACH PAIR OF VECTORS.
- A** $\vec{a} = (3, 2, -4)$ AND $\vec{b} = (3, -2, 7)$ **B** $\vec{c} = (-1, 6, 5)$ AND $\vec{d} = (10, 3, 1)$
- C** $\vec{p} = (2, 5, 6)$ AND $\vec{q} = (6, 6, -7)$ **D** $\vec{a} = (7, 8, 9)$ AND $\vec{b} = (5, -9, 5)$
- 13** FOR EACH PAIR OF VECTORS DEFINED ABOVE, FIND THE COSINE OF THE ANGLE BETWEEN THE VECTORS.